

SAT II Chemistry Guides:

Test Basics

Scoring, Timing, Number of Questions		
Points	Minutes	Questions
200-800	60	85 (Multiple Choice)

APTutorGroup

PART A

(必考題型 判斷酸鹼)

Questions 1-3 refer to the following aqueous solutions.

- (A) 0.1 M HCl
 - (B) 0.1 M NaCl
 - (C) 0.1 M $\text{HC}_2\text{H}_3\text{O}_2$
 - (D) 0.1 M CH_3OH
 - (E) 0.1 M KOH
1. Is weakly acidic
 2. Has the highest pH
 3. Reacts with an equal volume of 0.05 M $\text{Ba}(\text{OH})_2$ to form a solution with pH = 7.

1(C)

2(E)---SB

3(A)----SASB 的 ion 在水中為中性,前提要中和完全 SOL: 判斷酸鹼技巧:

1 區分 酸為(H^+), 鹼為(金+ OH^-)

(NH_3 例外視為 NH_4OH 為 WB)

($\text{C}_n\text{H}_{2n+1}\text{OH}$ 為 alcohol 為中性)

($\text{C}_n\text{H}_{2n+1}\text{COOH}$ 為 alcohol 為 WA or

$\text{HC}_n\text{H}_{2n+1}\text{CO}_2$)

2 區分是否為

SA ($\text{HClO}_4 > \text{HI} > \text{HBr} > \text{HCl} > \text{HNO}_3 > \text{H}_2\text{SO}_4 > \text{H}_3\text{O}^+$ (hydronium))

SB (IA, Ca, Sr, Ba)

SA SB 會完全解離 K_{eq} 很大 $\gg 1$, 所以解離後的 conjugate ions $[\text{A}^-] [\text{B}^+]$ 的 ions 在水中很安定, 幾乎不會水解反應, 故 SA SB 的 conjugate ions 在水中為中性 $K_{eq(\text{水解})}$ 極小 $\ll 10^{-14}$.

反之, WA WB 本身解離越弱 K_{eq} 小 (ex. 10^{-8}), 則本身安定, 而 WA WB 的 conjugate ions 在水中則越不安定, 易水解, 呈現相反性質, $K_{eq(\text{水解})}$ (ex. 10^{-6}) 會較強, 但不會到 SA SB 程度. $\langle K_{eq} * K_{eq(\text{水解})} = 10^{-14} (25^\circ\text{C}) \rangle$

3 區分是否為 Salt(金+非金(OH 之外的 ions)) 看水解(hydrolysis) 越弱的 Acid conjugate ions 為越強的 base, 反之亦然.

Questions 4-5

(A) 1

(B) 6

(C) 9

(D) 10

(E) 14

4. The atomic number of an atom with an electron dot arrangement similar to

找halogens

5. Is primarily responsible for the hardness of diamond

ANS: Network bonding

Questions 6-8 refer to the following information.

Na_2CrO_4 , a soluble yellow solid PbCrO_4 , an insoluble yellow solid NaNO_3 , a soluble white solid $\text{Pb}(\text{NO}_3)_2$, a soluble white solid

(A) Yellow solid and colorless solution

(B) Yellow solid and yellow solution

(C) White solid and colorless solution

(D) No solid and yellow solution

(E) No solid and colorless solution

6. Observed when 1.0 mol of Na_2CrO_4 and 2.0 mol of $\text{Pb}(\text{NO}_3)_2$ are mixed with 1 L of water (A)

7. Observed when 3.0 mol of Na_2CrO_4 and 1.0 mol of $\text{Pb}(\text{NO}_3)_2$ are mixed with 1 L of water (B)

8. Observed when 1.0 mol of NaNO_3 and 1.0 mol of $\text{Pb}(\text{NO}_3)_2$ are mixed with 1 L of water (E)

$\text{PbCrO}_4(\text{S})$ 黃色 CrO_4^{2-} 水溶液也是黃色
 $\text{XCrO}_4(\text{S})$ 沉澱幾乎都黃色

Questions 9-11

(A) 1 +

(B) 1-

(C) 0

- (D) 2+
- (E) 3+
- 9. Oxidation number of O in H₂O₂ (B)
- 10. Oxidation number of F in HF (B)
- 11. Oxidation number of O in O₃ (C)

Questions 12-14 refer to the following.

- (A) Nucleic acids 核酸
 - (B) Proteins
 - (C) Carbohydrates
 - (D) Lipids
 - (E) Electrolytes
12. Deoxyribose in DNA nucleotides belongs to this family of biologically important molecules

13. Always ionic in nature
14. Tend not to be water soluble, and aggregate into droplets or molecular bilayers

40(C) Deoxyribose(脫氧核糖) is a ribose sugar molecule missing an oxygen atom. As with all molecules with the suffix -ose, ribose(核糖) is a carbohydrate. In general, proteins tend to have the suffix -in (or -ase if they are an enzyme) and nucleic acids have the suffix -ine (except for uracil).

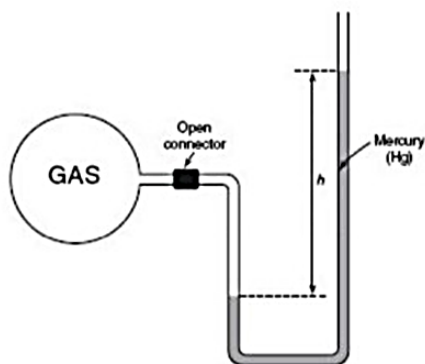
41(E) 42(D) 脂雙層球狀

PARTB

$\text{HC}_2\text{H}_3\text{O}_2 + \text{H}_2\text{O} \rightleftharpoons \text{C}_2\text{H}_3\text{O}_2^- + \text{H}_3\text{O}^+$ 101. If some acetic acid, $\text{HC}_2\text{H}_3\text{O}_2$, is added to the equilibrium mixture represented by the equation above, the concentration of H_3O^+ decreases.	BECAUSE	the equilibrium constant of a reaction changes as the concentration of the reactants changes.
F		F , Keq 只受 T 影響
102. The bonds found in a molecule of N_2 are nonpolar covalent	BECAUSE	there is an equal sharing of electrons between the nitrogen atoms.
T	CE	T, 相同 element ,有相同的 electronegativity = equal sharing of electrons.
103. Neutrons and protons are classified as nucleons	BECAUSE	neutrons and protons are both located in the principal energy levels of the atom.
T		F, the principal energy levels 為 electron 填入的 shell
104. As pressure on a gas increases, the volume of the gas decreases	BECAUSE	pressure and volume have a direct relationship.
T		F .direct relationship 正比 Reverse relationship 反比
105. A mixture of two different liquids can be separated via distillation.	BECAUSE	different liquids have different boiling points.

PART C

(氣體類型)



25. In the above laboratory setup to measure the pressure of the confined gas, what will be true concerning the calculated pressure on the gas?

- (A) The gas pressure will be the same as the atmospheric pressure.
- (B) The gas pressure will be less than the atmospheric pressure.
- (C) The gas pressure will be greater than the atmospheric pressure.
- (D) The difference in the height (h) of mercury levels is equal to the pressure of the gas.
- (E) The height (h) of mercury has no effect on the pressure calculation since the column of mercury is only used to enclose the gas volume.

(C) gas P = atmosphere + h of mercury

26. If the molecular mass of NH₃ is 17, what is the density of this compound at STP?

- (A) 0.25 g/L
- (B) 0.76 g/L
- (C) 1.52 g/L
- (D) 3.04 g/L
- (E) 9.11 g/L

PM=dRT 1*17 = d * 22.4 (B)

27. From 2 moles of KClO₃ how many liters of O₂ can be produced at STP by decomposition of all the KClO₃?

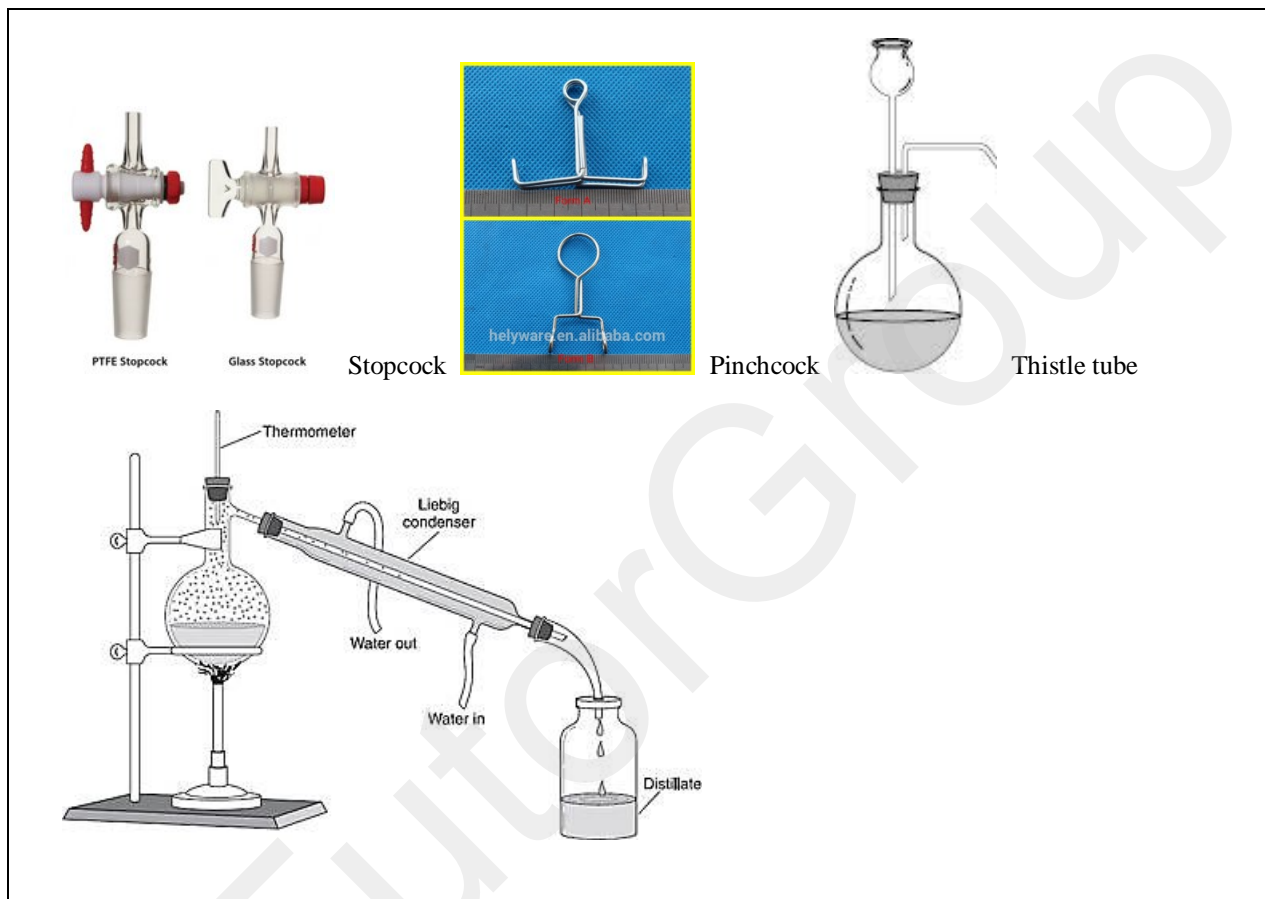
- (A) 11.2
- (B) 22.4
- (C) 33.6
- (D) 44.8
- (E) 67.2

2 KClO₃ → 2 KCl + 3 O₂ 單看兩項mol比2:3 所以(E)

28. hat piece of apparatus can be used to introduce more liquid into a reaction and serve as a pressure

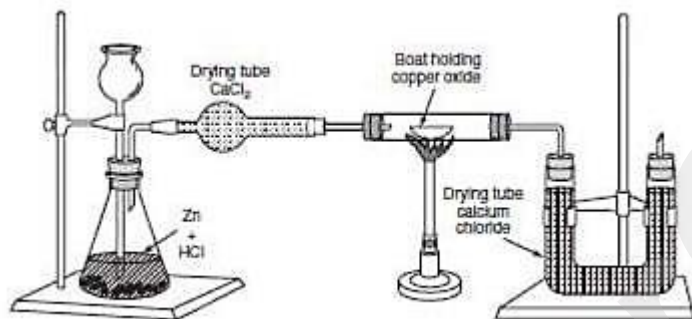
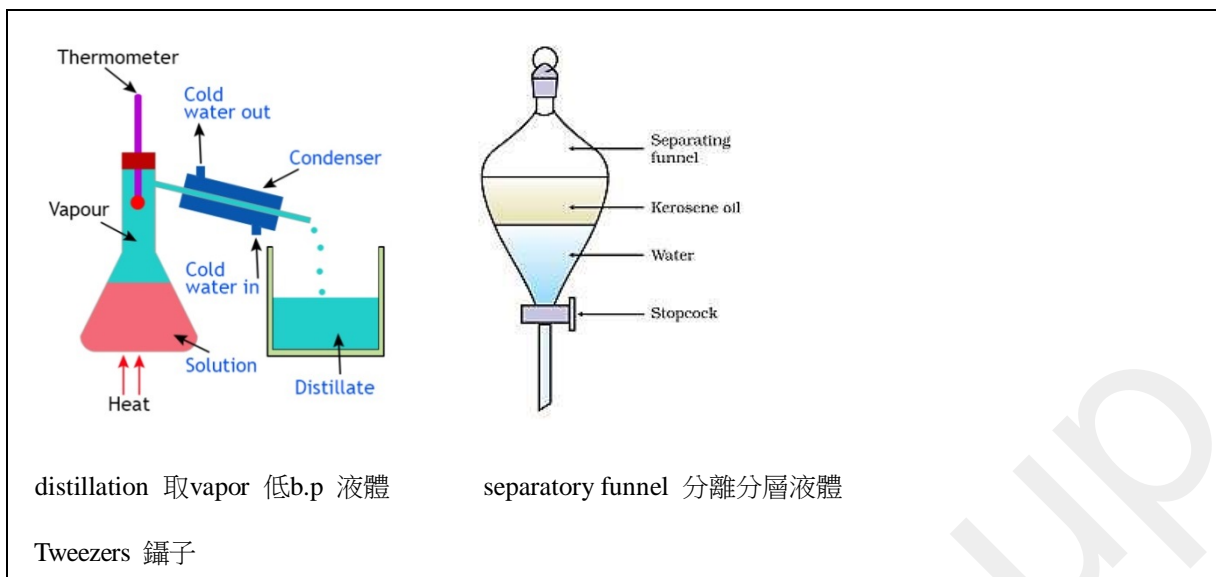
valve?

- (A) Stopcock
- (B) Pinchcock
- (C) Thistle tube
- (D) Flask
- (E) Condenser



29. Which mixture is correctly paired with a method for separation of the mixture?

- (A) Oil and water—filter paper
- (B) Salt water—distillation
- (C) Sand and water—separatory funnel
- (D) Sand and sugar—tweezers
- (E) Sugar water—filter paper



Recorded data:

- Weight of U-tube 20.36 g
- Weight of U-tube and calcium chloride before39.3
- Weight of U-tube and calcium chloride after57.32
- Weight of boat and contents (copper oxide) before.....g
- Weight of boat and contents after 14.23g
- Weight of boat5.00 g

30. What conclusion can be derived from the data collected?

- (A) Oxygen was lost from the CaCl₂.
- (B) Oxygen was generated in the U-tube.
- (C) Water was formed from the reaction.
- (D) Hydrogen was absorbed by the CaCl₂.
- (E) CuO was formed in the decomposition.

兩個乾燥 CaCl₂ 都是吸水土
 第一步產生 H₂
 第二步 H₂ 與 CuO → Cu + H₂O (C)

31. From the heats of reaction of these individual reactions:

- a. $A + B \rightarrow 2C \Delta H = -500 \text{ kJ}$,
- b. $D + 2B \rightarrow E \Delta H = -700 \text{ kJ}$,
- c. $2D + 2A \rightarrow F \Delta H = +50 \text{ kJ}$

Find the heat of reaction for $F + 6B \rightarrow 2E + 4C$.

- (A) +450 kJ
- (B) -1,100 kJ
- (C) +2,350 kJ
- (D) -350 kJ
- (E) -2,450 kJ

(E) $a*2+b*2+c*(-1)$

32. Which of these statements is NOT correct?

- (A) In an exothermic reaction, ΔH is negative and the enthalpy decreases.
- (B) In an endothermic reaction, ΔH is positive and the enthalpy increases.
- (C) In a reaction where ΔG is negative, the forward reaction is spontaneous.
- (D) In a reaction where ΔG is positive, ΔS may also be positive.
- (E) In a reaction where ΔH is positive and ΔS is negative, the forward reaction is spontaneous.

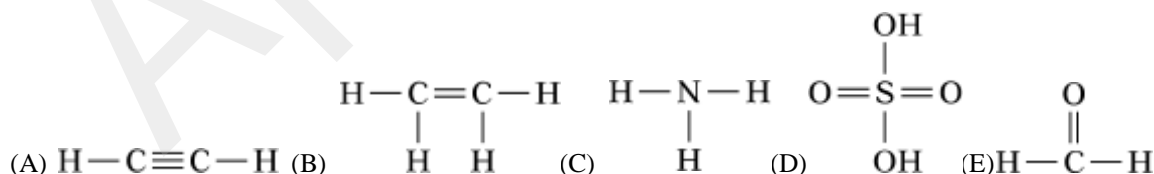
(E)

33. Choose the answer below that accurately describes the correct molecular shape for the molecule XeOF_4 .

- (A) Tetrahedral
- (B) Trigonal pyramidal
- (C) Trigonal bipyramidal
- (D) Square pyramidal
- (E) Flat

(D) $(8+0+4)/2 = 6 \text{ --- } sp^3d^2 \text{ (6-5)}$

34. Which structure below demonstrates a violation of the octet rule?



(D) 滿足 FC=0 常常會超過 octets, 或算中心共用的電子有沒有超出 8 個。

35. Equilibrium

- (A) is defined as equal concentrations of reactants and products

- (B) is defined as equal rates for forward and reverse reactions
- (C) can be shifted by adding a catalyst
- (D) can exist for chemical changes but not physical changes
- (E) must always favor the formation of products

(B) Equilibrium 為 reactants products 濃度不變化時

$K_{eq} > 1$ 表示 spontaneous 傾向 products 方, 濃度也會較高.

K_{eq} 大小與正逆反應速度無關, 但平衡時正逆 Rate 相等

例如 $C_{\text{graphite}} \rightarrow C_{\text{diamond}}$ $K_{eq} > 1$, 自發, 但速度極慢.

36. What is the molar mass of a nonionizing solid if 10.grams of this solid, dissolved 200. grams of water, formed a solution that froze at -3.72°C ?

- (A) 25. g/mol
- (B) 50. g/mol
- (C) 100. g/mol
- (D) 150. g/mol
- (E) 1,000. g/mol

(A)

沸點上升 = $+K_b \cdot C_m \cdot i$ $K_b = 0.52$ (背)

凝固點下降 = $-K_f \cdot C_m \cdot i$ $K_f = 1.86$ (背)

蒸氣壓下降量 = $P_{(\text{solvent})} \cdot X_{(\text{solute})}$

37. All of the following can act as Brønsted-Lowry acids (proton donors) in aqueous solution EXCEPT

- (A) HI (B) NH_4^+ (C) HCO_3^-
- (D) H_2S (E) NH_3

(E) NH_3 為 base 為接受 H^+

Conjugate pairs = 主體相同, 差一個 H^+

有 H^+ 的為 Acid.

38. An aqueous solution with pH 5 at 25°C has a hydroxide ion (OH^-) concentration of

- (A) 1×10^{-11} molar
- (B) 1×10^{-9} molar
- (C) 1×10^{-7} molar
- (D) 1×10^{-5} molar
- (E) 1×10^{-3} molar

(B) 基本 $-\log$ 運算 $\text{PH} + \text{POH} = 14$ (25 度)

(C)

39. When excited electrons cascade to lower energy levels in an atom,

- (A) visible light is always emitted (UV ,infrared....)
- (B) the potential energy of the atom increases (無關)
- (C) the electrons always fall back to the first energy level (不一定)
- (D) the electrons fall indiscriminately to all levels (要軌域中無電子才行,H原子是因為單電子才都可)
- (E) the electrons fall back to a lower unfilled energy level

(E)

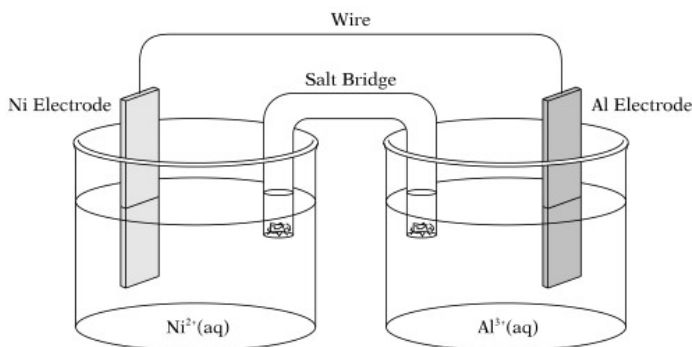
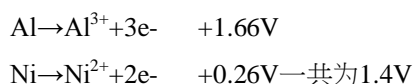


Figure 2



40. Which statement is true about the setup above?

- (A) The electrode potential for this cell is 1.40V.
- (B) The electrode potential for this cell is 2.54V.
- (C) Electrons will be carried by the salt bridge.
- (D) Ions will be carried through the wire.
- (E) The reaction is nonspontaneous.

(A) $E^0 = E^0_{\text{ox}} + E^0_{\text{re}}$ 注意不隨係數改變

41. A voltaic cell is set up and a chemical reaction proceeds spontaneously. Which of the following will not occur in this reaction?

- (A) The electrons will migrate through the wire.
- (B) The cations in the salt bridge will migrate to the anode half cell.
- (C) The cathode will gain mass.
- (D) The anode will lose mass.
- (E) Reduction will occur at the cathode.

(B) the anions in the salt bridge will migrate to the anode half cell.

42. Which compound is matched up with its correct name?

- (A) CO—monocarbon monoxide
- (B) CaF₂—calcium difluoride

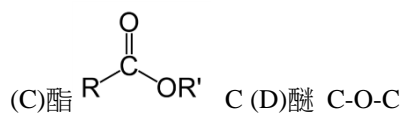
- (C) CCl₄—carbon tetrachloride
- (D) PCl₃—potassium trichloride
- (E) TiF₄—tin(IV) fluoride

- (A) CO—~~mono~~carbon monoxide 首字為一不寫
- (B) CaF₂—calcium ~~di~~fluoride ionic 不寫perfix
- (C) CCl₄—carbon tetrachloride
- (D) PCl₃—~~potassium~~ trichloride → phosphorous
- (E) TiF₄—~~tin~~(IV) fluoride → titanium

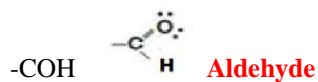
43. Which functional group below does not contain a carbonyl group?

- (A) Aldehydes
- (B) Ketones
- (C) Esters
- (D) Ethers
- (E) Carboxylic acids

Carbonyl group: -C=O



-OH Alcohol =hydroxyl



-COOH Carboxyl= carboxylic acid